

0 1 2 3 4 5 6 7 8 9 10 11 12 13 14 15 16 17 18 19 20

0 1 2 3 4 5 6 7 8 9 10 11 12 13 14 15 16 17 18 19 20

0 1 2 3 4 5 6 7 8 9 10 11 12 13 14 15 16 17 18 19 20

0 1 2 3 4 5 6 7 8 9 10 11 12 13 14 15 16 17 18 19 20

0 1 2 3 4 5 6 7 8 9 10 11 12 13 14 15 16 17 18 19 20

0 1 2 3 4 5 6 7 8 9 10 11 12 13 14 15 16 17 18 19 20

0 1 2 3 4 5 6 7 8 9 10 11 12 13 14 15 16 17 18 19 20

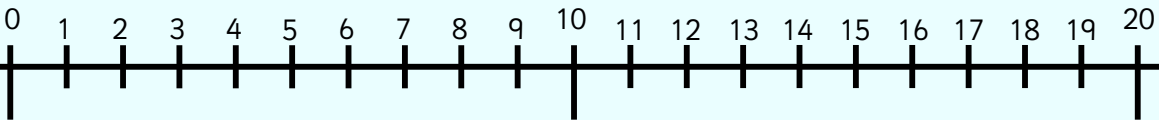
0 1 2 3 4 5 6 7 8 9 10 11 12 13 14 15 16 17 18 19 20

0 1 2 3 4 5 6 7 8 9 10 11 12 13 14 15 16 17 18 19 20

0 1 2 3 4 5 6 7 8 9 10 11 12 13 14 15 16 17 18 19 20

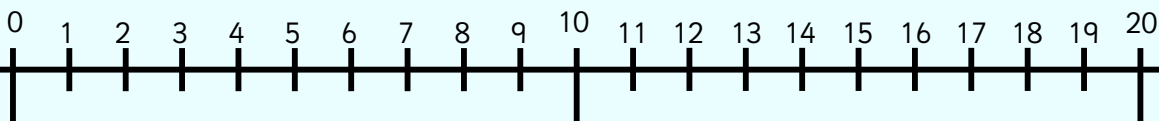
Use this number line and counters to help you solve this problem. You can draw on the jumps to make sure you have counted correctly.

$$15 + \square = 20$$



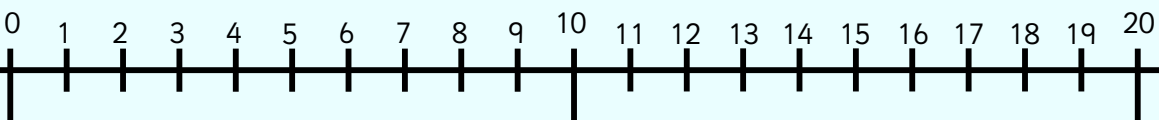
Use this number line and counters to help you solve this problem. You can draw on the jumps to make sure you have counted correctly.

$$2 + \square = 11$$



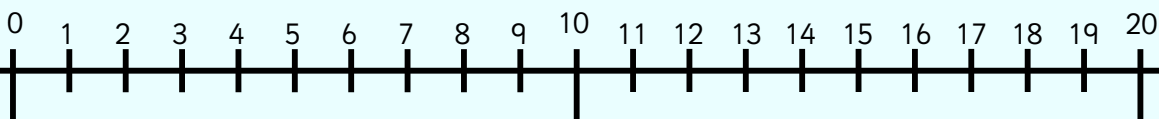
Use this number line and counters to help you solve this problem. You can draw on the jumps to make sure you have counted correctly.

$$6 + \square = 13$$



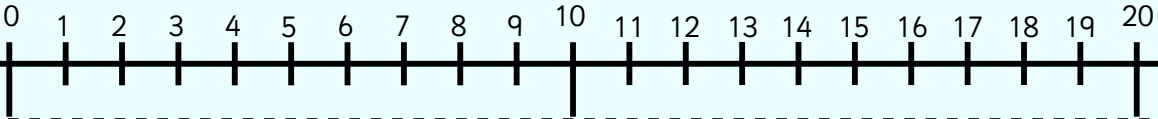
Use this number line and counters to help you solve this problem. You can draw on the jumps to make sure you have counted correctly.

$$4 + \square = 11$$



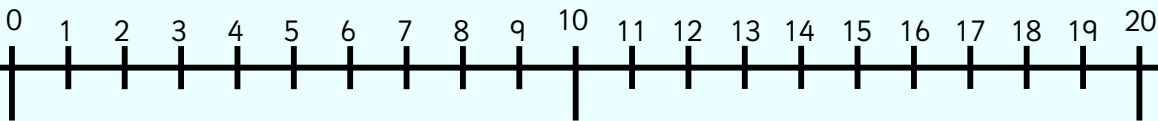
Use this number line and counters to help you solve this problem. You can draw on the jumps to make sure you have counted correctly.

$$12 + \square = 13$$



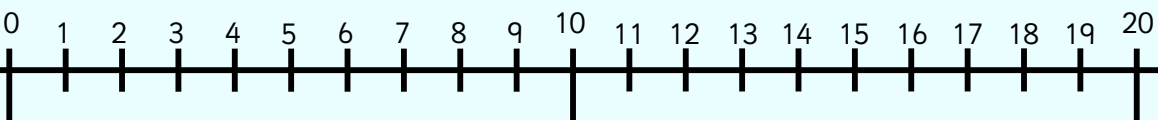
Use this number line and counters to help you solve this problem. You can draw on the jumps to make sure you have counted correctly.

$$8 + \square = 12$$



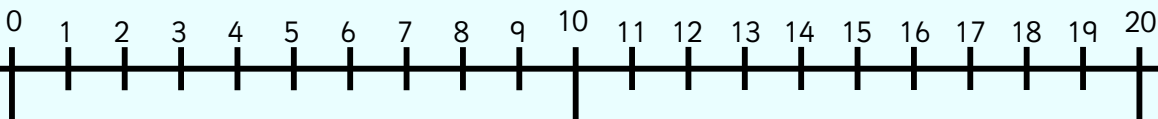
Use this number line and counters to help you solve this problem. You can draw on the jumps to make sure you have counted correctly.

$$\square + 9 = 14$$



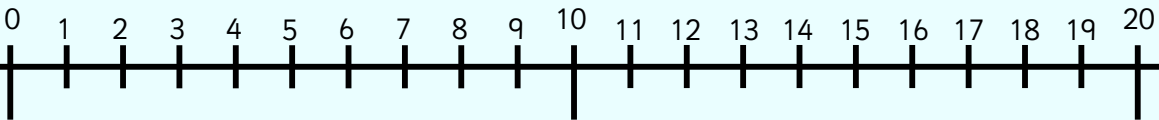
Use this number line and counters to help you solve this problem. You can draw on the jumps to make sure you have counted correctly.

$$\square + 15 = 19$$



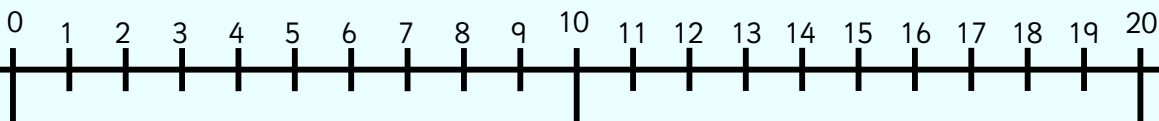
Use this number line and counters to help you solve this problem. You can draw on the jumps to make sure you have counted correctly.

$$\square + 7 = 16$$



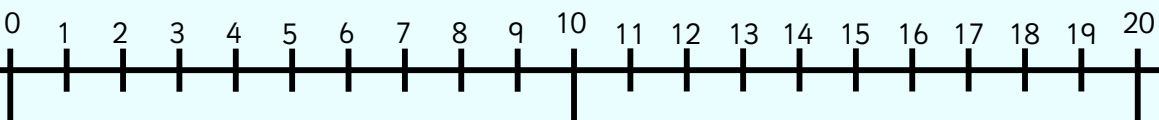
Use this number line and counters to help you solve this problem. You can draw on the jumps to make sure you have counted correctly.

$$\square + 17 = 20$$



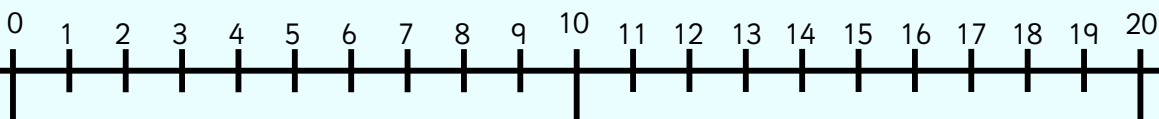
Use this number line and counters to help you solve this problem. You can draw on the jumps to make sure you have counted correctly.

$$\square + 3 = 9$$



Use this number line and counters to help you solve this problem. You can draw on the jumps to make sure you have counted correctly.

$$\square + 4 = 15$$



Name: _____ Date: _____



Can you solve these problems? You might like to use a number line and some counters.

$9 + \square = 16$

$10 + \square = 20$

$3 + \square = 12$

$8 + \square = 13$

$6 + \square = 20$

$0 + \square = 5$

$5 + \square = 14$

$\square + 5 = 5$

$\square + 3 = 9$

$12 + \square = 15$

$3 + \square = 8$

$\square + 10 = 15$

$\square + 0 = 9$

$0 + \square = 13$

$17 + \square = 19$

$\square + 6 = 20$

Name: _____ Date: _____



Can you solve these problems? You might like to use a number line and some counters.

$3 + \square = 15$

$8 + \square = 16$

$2 + \square = 20$

$7 + \square = 15$

$5 + \square = 13$

$0 + \square = 10$

$\square + 2 = 8$

$\square + 4 = 16$

$\square + 2 = 11$

$\square + 5 = 18$

$3 + 3 + \square = 8$

$2 + 1 + \square = 6$

$4 + 2 + \square = 10$

$2 + 0 + \square = 5$







$5 + 2 + \square = 11$

$0 + 1 + \square = 7$



Read the instructions below to play this game. You might like to use a number line and counters to help you solve the number sentences.







1. Find a partner, get a dice and some counters that are all one colour.
2. Player A rolls the dice. Answer the first question in the row of the number you rolled.
3. Answer the question on the recording sheet. If you are correct cover that square with your coloured counter.
4. Player B then has their turn and does the same.
5. The winner is the first person to get to the end of any row.

	$9 + \square = 12$	$3 + \square = 7$	$8 + \square = 20$	$2 + \square = 9$
	$\square + 5 = 13$	$\square + 0 = 10$	$\square + 4 = 18$	$\square + 9 = 12$
	$0 + \square = 14$	$1 + \square = 9$	$2 + \square = 19$	$6 + \square = 8$
	$\square + 2 = 9$	$\square + 3 = 12$	$\square + 1 = 5$	$\square + 7 = 14$
	$2 + \square = 17$	$0 + \square = 20$	$1 + \square = 16$	$4 + \square = 11$
	$\square + 9 = 19$	$2 + \square = 20$	$\square + 1 = 8$	$0 + \square = 15$



Use this sheet to record your answers to the questions on the game board.

Remember to use a number line and counters to help you solve the number sentences if you need to.

Name: _____ Date: _____



Today I have been using a number line to find out how many more are needed to make a total.



Stick your photo here

Which resources did you use?

Draw the face on the bee to self-assess your work.

