


Name: _____

Date: _____




Circle all the even numbers. Remember even numbers can be shared into two equal groups. Use objects to help you.

0	1	2	3	4	5	6	7	8	9
10	11	12	13	14	15	16	17	18	19





I need odd-numbered pigs in one field and even-numbered pigs in the other. Please draw a **red** mark on all the **odd**-numbered pigs and a **green** mark on all the **even**-numbered pigs.



Roll two dice. Add the two numbers together. Now work out if this number is odd or even.



 3 + 5 =	8	even

 3 + 2 =		


Name: _____

Date: _____




Circle all the even numbers. Remember even numbers can be shared into two equal groups. Use objects to help you.

0	1	2	3	4	5	6	7	8	9
10	11	12	13	14	15	16	17	18	19





I need odd-numbered rabbits in one field and even-numbered rabbits in the other. Please draw a red mark on all the odd-numbered rabbits and a green mark on all the even-numbered rabbits.



Roll two dice to make a two-digit number. Now work out if this number is odd or even.



 35	odd

 32	even


Name: _____

Date: _____




Circle all the even numbers. Remember even numbers can be shared into two equal groups. Use objects to help you.

0	1	2	3	4	5	6	7	8	9
---	---	---	---	---	---	---	---	---	---



I need odd-numbered rabbits in one field and even-numbered rabbits in the other. Please draw a red mark on all the odd-numbered rabbits and a green mark on all the even-numbered rabbits.



Roll two dice to make a two-digit number. Now work out if this number is odd or even.




	70	even

	97	odd




Sort my animals into their correct odd or even pens.

Is fourteen odd or even?




14

Is nine odd or even?




9

Is twenty-two odd or even?




22

Is fifteen odd or even?




15

Is ten odd or even?




10

Is twenty-one odd or even?




21

Is six odd or even?



6

Is twenty-five odd or even?




25




Sort my animals into their correct odd or even pens.

Is forty-four odd or even?




44

Is twenty-nine odd or even?




29

Is thirty-six odd or even?




36

Is thirty-one odd or even?




31

Is thirty odd or even?




30

Is forty-seven odd or even?




47

Is twenty-six odd or even?




26

Is fifty-three odd or even?



53

 Odd

 Even 

 Odd

 Even 

 Odd

 Even 

 Odd

 Even 

 Odd

 Even 

Name: _____

Date: _____



Today I have been identifying odd and even numbers.

Stick your photo here

Which resources did you use?

Draw the face on the bee to self-assess your work.

