

# Let's count in multiples!

# Sequences 1A

Fill in the missing numbers in this sequence.



This sequence increases in jumps of...

Fill in the missing numbers in this sequence.



This sequence increases in jumps of...

Fill in the missing numbers in this sequence.



This sequence increases in jumps of...

# Let's count in multiples!

# Sequences 1A

Fill in the missing numbers in this sequence.

This sequence increases in jumps of...



Fill in the missing numbers in this sequence.

This sequence increases in jumps of...



Fill in the missing numbers in this sequence.

This sequence increases in jumps of...



# Let's count in multiples!

# Sequences 1A

Fill in the missing numbers in this sequence.

This sequence increases in jumps of...



Fill in the missing numbers in this sequence.

This sequence increases in jumps of...



Fill in the missing numbers in this sequence.


This sequence increases in jumps of...



# Let's count in multiples!


# Sequences 1A

Fill in the missing numbers in this sequence.




This sequence increases in jumps of...

Fill in the missing numbers in this sequence.



This sequence increases in jumps of...

Fill in the missing numbers in this sequence.



This sequence increases in jumps of...

# Let's count in multiples!

# Sequences 1B

Fill in the missing numbers in this sequence.



This sequence increases in jumps of...

Fill in the missing numbers in this sequence.



This sequence increases in jumps of...

Fill in the missing numbers in this sequence.




This sequence increases in jumps of...

# Let's count in multiples!

# Sequences 1B


Fill in the missing numbers in this sequence.

This sequence increases in jumps of...




Fill in the missing numbers in this sequence.

This sequence increases in jumps of...



Fill in the missing numbers in this sequence.

This sequence increases in jumps of...



# Let's count in multiples!

# Sequences 1B

Fill in the missing numbers in this sequence.

This sequence increases in jumps of...



Fill in the missing numbers in this sequence.

This sequence increases in jumps of...



Fill in the missing numbers in this sequence.


This sequence increases in jumps of...



# Let's count in multiples!


# Sequences 1B

Fill in the missing numbers in this sequence.




This sequence increases in jumps of...

Fill in the missing numbers in this sequence.



This sequence increases in jumps of...

Fill in the missing numbers in this sequence.



This sequence increases in jumps of...



# Let's count in multiples!

# Sequences 1C

Fill in the missing numbers in this sequence.



This sequence increases in jumps of...

Fill in the missing numbers in this sequence.



This sequence increases in jumps of...

Fill in the missing numbers in this sequence.



This sequence increases in jumps of...

# Let's count in multiples!

# Sequences 1C

Fill in the missing numbers in this sequence.

This sequence increases in jumps of...




Fill in the missing numbers in this sequence.

This sequence increases in jumps of...



Fill in the missing numbers in this sequence.

This sequence increases in jumps of...



# Let's count in multiples!

# Sequences 1C

Fill in the missing numbers in this sequence.

This sequence increases in jumps of...



Fill in the missing numbers in this sequence.

This sequence increases in jumps of...



Fill in the missing numbers in this sequence.


This sequence increases in jumps of...



# Let's count in multiples!


# Sequences 1C

Fill in the missing numbers in this sequence.




This sequence increases in jumps of...

Fill in the missing numbers in this sequence.



This sequence increases in jumps of...

Fill in the missing numbers in this sequence.



This sequence increases in jumps of...

Let's count in multiples!

Number Sets 1A

14

15

16

18

19

22

24

25

Let's count in multiples!

Number Sets 1B

24

26

30

32

38

40

42

46

Let's count in multiples!

Number Sets 1C

25

30

45

50

55

60

75

80

Let's count in multiples!

Number Sets 1D

20

30

40

60

90

100

120

130



Name: \_\_\_\_\_

Date: \_\_\_\_\_



Today I have been completing missing number sentences.

Stick photo here

Which resources did you use?

Draw the face on the bee to self-assess your work.

